

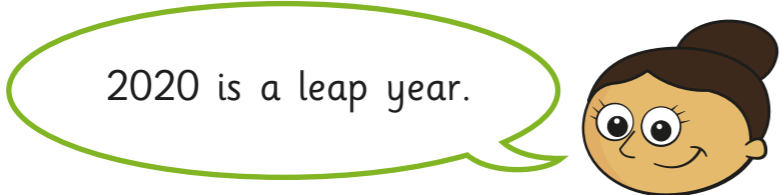
Years, months, weeks and days

1 Sort the months into the table.

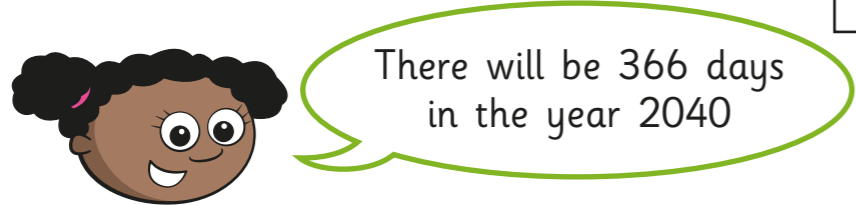
January	April	July	October
February	May	August	November
March	June	September	December

Less than 30 days	30 days	31 days

2



a) How many days will there be in 2020?

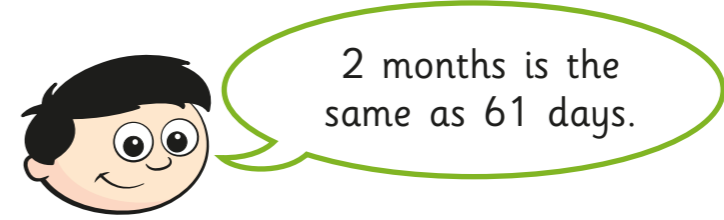
 days


b) Do you agree with Whitney? _____

Explain your answer.



3



Is this always true, sometimes true or never true?

Tick your answer.

always true	sometimes true	never true
-------------	----------------	------------

Prove your answer.

4

Write <, > or = to complete the statements.

- 1 week 7 days
- 15 days 2 weeks
- 15 days 1 month
- 360 days 1 year
- 360 weeks 1 year
- 12 months 1 year
- 20 months 2 years
- 40 months 3 years

5 Complete the tables.

Weeks	Days
2	
4	
8	
80	
40	
28	


Days	Weeks
	1
	3
	10
	9
	13
	36

6

September						
M	T	W	Th	F	Sa	Su
		1	2	3	4	5
6	7	8	9	10	11	12
13	14	15	16	17	18	19
20	21	22	23	24	25	26
27	28	29	30			

a)

Jack




My birthday is on the third Friday of September.

When is Jack's birthday?

Date: Month _____

b)

Amir



My birthday is on the same date as Jack's but in August.

When is Amir's birthday?

Date: Month _____

7

Tim is three times as old as Anna.
George is 4 months older than Anna.
Anna is 2 years and 2 months old.
What is their combined age?

years months

8

Jack, Annie and Alex went for a run together on Tuesday 5 January.

Jack ran every 2 days after that.

Alex ran every 3 days after that.

a) How many more times in January will Jack and Alex run together on the same day?

more times

b) Annie only runs on Tuesdays.

When is the next time that all three friends will run together on the same day?

